

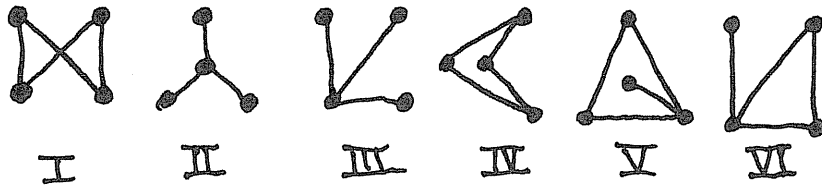
Math 113

HW 3A

Due Monday, February 8

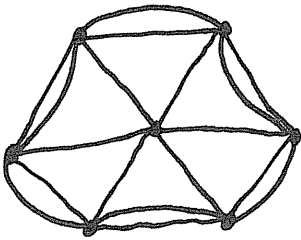
Q1: Which graphs below are isomorphic to each other?

(Hint: each graph is isomorphic to at least one other.)

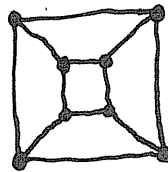


Q2: Does the graph have an Eulerian circuit?
If so, find it; if not, explain why not.

a)



b)



c)

